

Anglo-Chinese School
(Junior)



CONTINUAL ASSESSMENT 1 (2008)
PRIMARY 3

MATHEMATICS

Tuesday

4 March 2008

1 hour

INSTRUCTIONS TO PUPILS

DO NOT TURN OVER THE PAGES UNTIL YOU ARE TOLD TO DO SO.

Follow all instructions carefully.

There are 23 questions in this booklet.

Answer ALL questions.

Name:..... ()

Class:.....

Section	Possible Marks	Marks Obtained
A	20	
B	18	
C	12	
TOTAL	50	

Parent's Signature : _____

This question paper consists of 7 printed pages. (Inclusive of cover page)

$\angle A1 = 28$ to $28/96$
 $\angle A1 = 28/97$ to $28/114$
 $\angle A2 = 28/115$ to $28/134$

Section A (10 × 2 marks)

For each question, four options are given. Choose the correct answer and write its number (1, 2, 3 or 4) in the brackets provided.

1. How many hundreds are there in 110 tens?

- (1) 1
- (2) 11
- (3) 110
- (4) 1 000

()

2. In which of the following numerals is the digit 5 in the ones place?

- (1) 1 258
- (2) 2 581
- (3) 5 812
- (4) 8 125

()

3. 3 000 is 10 more than _____.

- (1) 2 090
- (2) 2 990
- (3) 3 010
- (4) 3 100

()

4. The sum of 6 793 and two thousand and fourteen is _____.

- (1) 7 007
- (2) 7 033
- (3) 8 807
- (4) 8 833

()

5. The difference between 468 and 1 357 is _____.

- (1) 889
- (2) 999
- (3) 1 111
- (4) 1 825

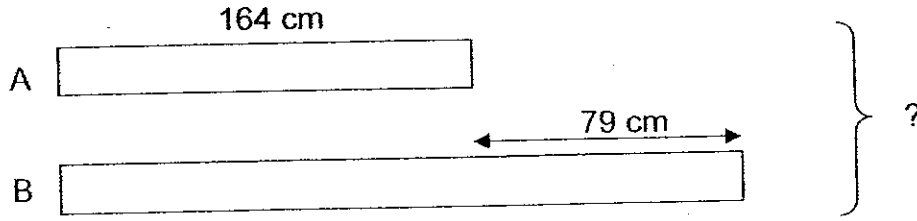
()

6. 3 hundreds 6 tens more than 23 hundreds is _____.

- (1) 59
- (2) 590
- (3) 2 606
- (4) 2 660

()

7.



May has two pieces of ribbon, A and B. Find the total length of both ribbons.

- (1) 243 cm
- (2) 322 cm
- (3) 328 cm
- (4) 407 cm

()

8. Of the 6 611 people at a concert, 3 052 were men and the rest were women. How many more women than men were there?

- (1) 507
- (2) 589
- (3) 3 559
- (4) 3 641

()

9. If $\odot \times \odot \times \odot = 27$

What is $\odot \times \odot$?

- (1) 6
- (2) 9
- (3) 18
- (4) 81

()

10. When I divide a number by seven, the answer is eight.

What is the number?

- (1) 1
- (2) 15
- (3) 49
- (4) 56









()

Section B (9 × 2 marks)

For each question, write your answer in the spaces provided. Give your answer in the units stated.

11. The smallest 4-digit even number that can be formed with the digits 5, 7, 0 and 2 is _____.

12. What is the missing number in the number pattern?
1 437 , 1 337 , 1 137 , _____ , 437

13.  +  +  = 500
 +  = 125
 +  = 400
 = _____

14. The difference between two numbers is 675. If the smaller number is 4 321, what is the bigger number?

15. Gillian is 39 years old. She is 19 years younger than Wei Ming. What is their total age?

years

16. $3\ 564 = 3\ 000 + \underline{\hspace{2cm}} + 10 + 1$

--

17. When a number is multiplied by 9, the answer is smaller than 70 but greater than 60. What is the number?

--

18. Mr Wong had twice as much money as Mr Tan. If they had \$24 altogether, how much money did Mr Wong have?

\$

19. The table shows the number of chairs arranged in rows which follows a pattern. How many chairs are there in Row 12?

Row	1	2	3	4
Number of Chairs	1	3	5	7

→

6
11

→

12
?

--

Section C (4 × 3 marks)

Work out the following sums carefully. Show each step of your working clearly as marks will be given for working and relevant statements.

20. From January to March, Gomez sold 3 500 bags. In January, he sold 1 088 bags. In February, he sold 20 more bags than he did in January. How many bags did he sell in March?

21. Jaya is 18 years younger than Ken. If Ken is 76 years old, what is the total age of both of them in 10 years time?

22. There were 172 men and 246 women on a train at first. At the next station, 38 men boarded the train while 59 women got down from the train. How many people were on the train when it left the station?

23. Mrs Teo baked 6 boxes of cookies. There were 9 cookies in each box. She gave away 8 cookies to each of her two neighbours. How many cookies were left?

- End of paper -

ANSWER SHEET

misskoh.com

EXAM PAPER 2008

SCHOOL : ACS PRIMARY SCHOOL
SUBJECT : PRIMARY 3 MATHEMATICS

TERM : CA 1

Q1	Q2	Q3	Q4	Q5	Q6	Q7	Q8	Q9	Q10
2	4	2	3	1	4	4	1	2	4

11)2570 12)837 13)100 14)4996 15)97 years

16)553 17)7 18)\$16 19)23

20)Jan→1088
Feb→ $1088+20=1108$
March→ $3500-1088-1108=1304$

21) $76-18=58$
 $58+76+10+10=154$

22) $172+246+38-59=397$

23) $6 \times 9=54$
 $54-8-8=38$